

Grade 6 FAST—Brain Dump Suggestions

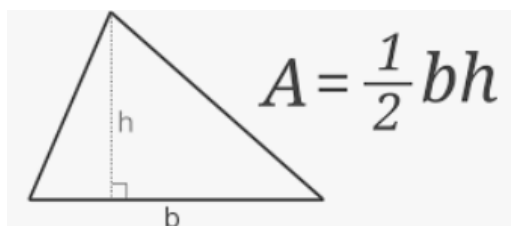
Coordinates

(x, y)
↔ ↓

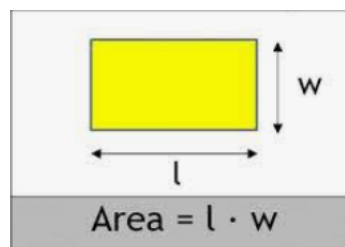
Number Line



Area of a Triangle



Area of a Rectangle



Inequalities and Graphing Inequalities

> Greater Than ○ →

< Less Than ← ○

≥ Greater Than or Equal To ● →

≤ Less Than or Equal to ← ●

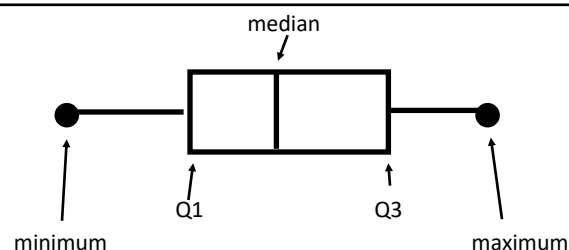
Mean: finding the average

Median: finding the middle number

Mode: finding the most common number

Range: maximum number minus minimum number

Interquartile Range (IQR): Quartile 3 minus Quartile 1



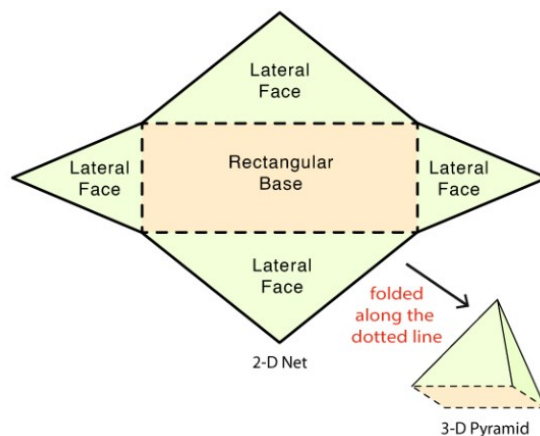
Box and Whisker Plot



Rectangular Prism



Net of a Rectangular Prism



$3x$ This means 3 times x $(3 \cdot x)$